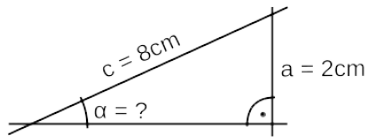
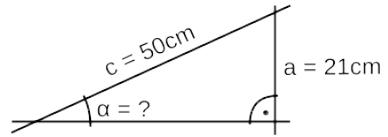


Aufgaben die mit Sinus gelöst werden.

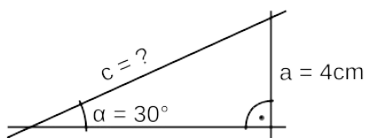
(1) a)



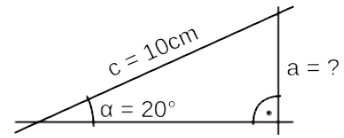
b)



c)

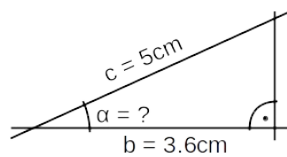


d)

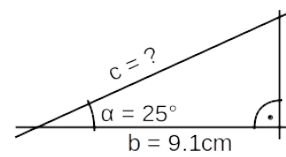


Aufgaben die mit Kosinus gelöst werden.

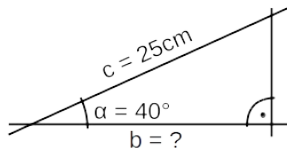
(2) a)



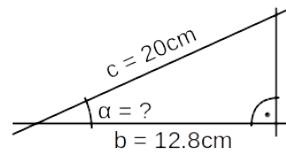
b)



c)

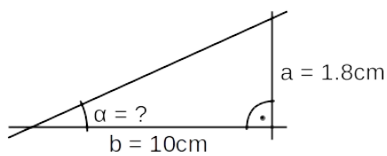


d)

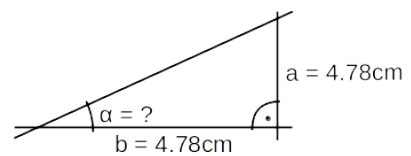


Aufgaben die mit Tangens gelöst werden.

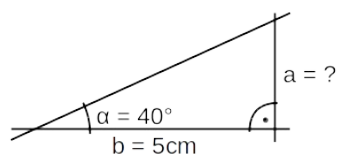
(3) a)



b)



c)



d)

