

(1) a)  $\frac{a}{b} = \frac{3}{1}$

b)  $\frac{a}{b} = \frac{6}{5}$

c)  $\frac{a}{b} = \frac{2}{3}$

d)  $\frac{a}{b} = \frac{4}{3}$

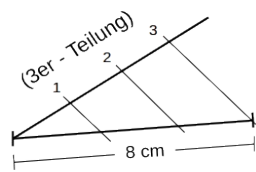
a)  $|AB| = 18 \text{ cm}$

b)  $|AB| = 40 \text{ cm}$

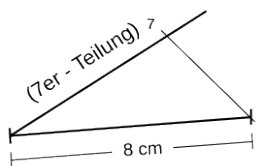
c)  $|CD| = 120 \text{ dm}$

d)  $|CD| = 108 \text{ mm}$

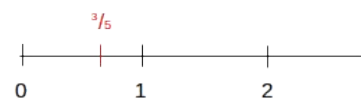
(3) a)



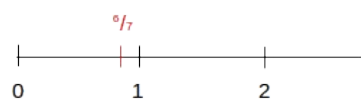
b)



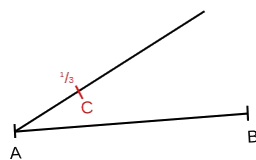
(4) a)



b)



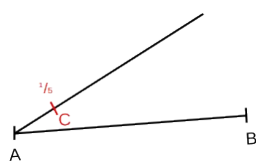
(5) a)



(6) a)



b)



b)

