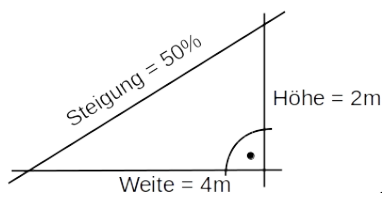


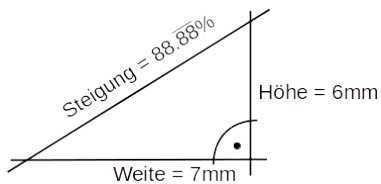
Bestimme jeweils die Steigung.

(1)



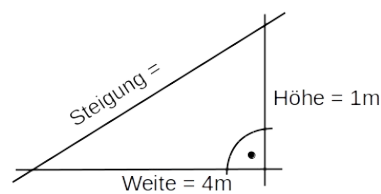
$$\text{Steigung} = \frac{2 \text{ m}}{4 \text{ m}} = \frac{2 \cdot 25}{4 \cdot 25} = \frac{50}{100} = \underline{50\%}$$

(2)



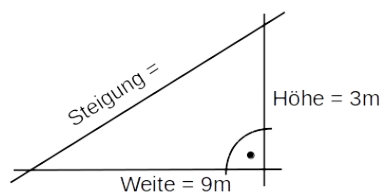
$$\text{Steigung} = \frac{6 \text{ mm}}{7 \text{ mm}} = \frac{0.\overline{88} \cdot 100}{1 \cdot 100} = \frac{88.\overline{88}}{100} = \underline{88.\overline{88}\%}$$

(3)



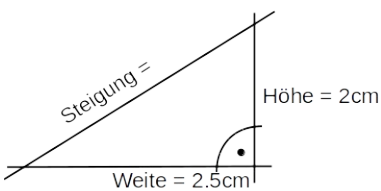
$$\text{Steigung} =$$

(4)



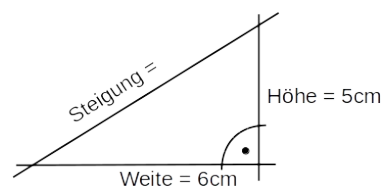
$$\text{Steigung} =$$

(5)



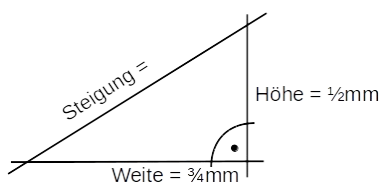
$$\text{Steigung} =$$

(6)



$$\text{Steigung} =$$

(7)



$$\text{Steigung} =$$