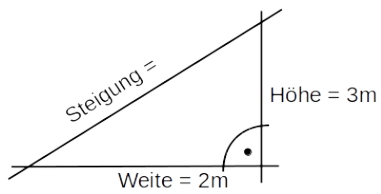


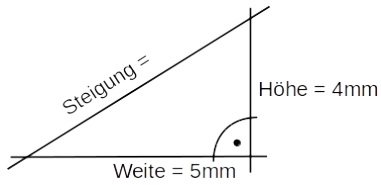
Bestimme jeweils die Steigung.

(1)



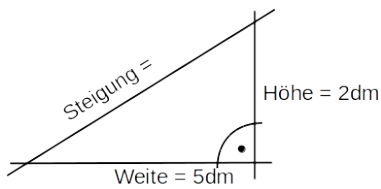
Steigung =

(2)



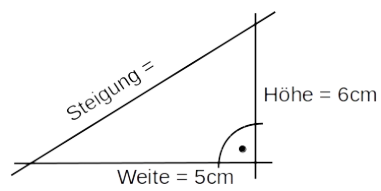
Steigung =

(3)



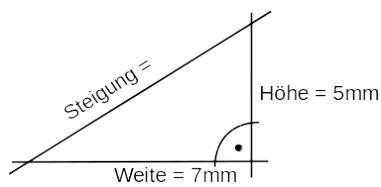
Steigung =

(4)



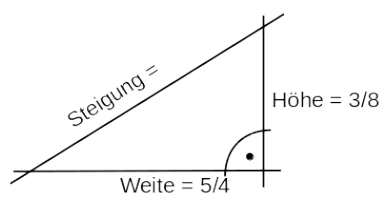
Steigung =

(5)



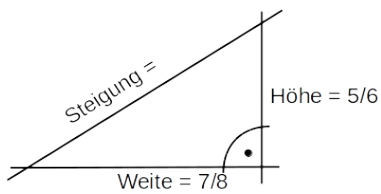
Steigung =

(6)



Steigung =

(7)



Steigung =