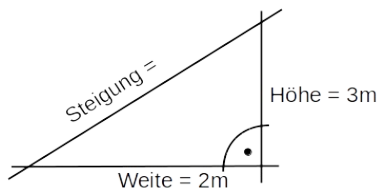


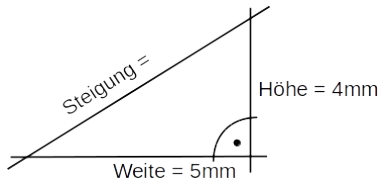
Bestimme jeweils die Steigung.

(1)



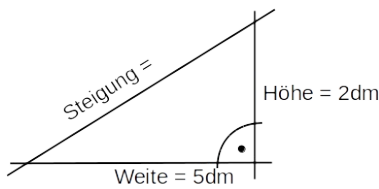
*Steigung = 150 %*

(2)



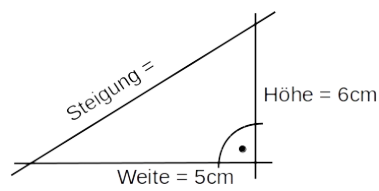
*Steigung = 80 %*

(3)



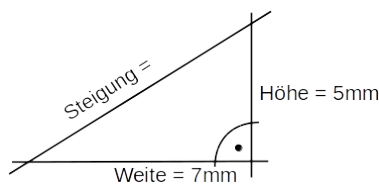
*Steigung = 40 %*

(4)



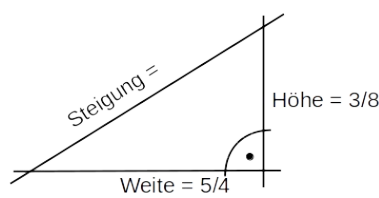
*Steigung = 120 %*

(5)



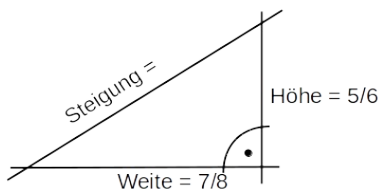
*Steigung = 71.14 %*

(6)



*Steigung = 30 %*

(7)



*Steigung = 95.24 %*